


Dice Math

Free Printable

Thanks for downloading from abcdelearning.com! I hope you enjoy this FREE download. By downloading this product, you are licensed as a single user for classroom and personal use. Do not copy or claim as your own, any part of these materials. You may share this through social media, but please provide credit to my site through a clickable link.

Thank you to the amazing clip art artists that helped me be able to create these worksheets!

Thank you
Happy learning!



Roll and Cover

Directions: Roll the dice and color up the number shown. Do this 4 times!

1

2

3

4

5

6

1

2

3

4

5

6

1

2

3

4

5

6

1

2

3

4


5

6


What was the highest number you rolled?

Roll and Color


Directions: Roll a piece of dice and color the ice cream scoops the color that you read on the key!




Red




Blue




Green



Purple



Orange









Yellow




Dice Number Matching


Directions: Draw a line from the dots on the dice that match the number





Write the Number


Directions: Count how many dots are on the dice and write that amount on the line.


















Draw the Dice

Directions: Identify the number on the left side and draw that amount of dots in the square.





Roll and Add



Directions: Roll a piece of once, write the number in the first box. Roll again, write that number in the second box to find the answer!


$$\square + \square = \square$$

$$\square + \square = \square$$


$$\square + \square = \square$$

$$\square + \square = \square$$

$$\square + \square = \square$$



Roll and Subtract



Directions: Roll a piece of once, write the number in the first box. Roll again, write that number in the second box to find the answer!

$$\square - \square = \square$$

$$\square - \square = \square$$



$$\square - \square = \square$$

$$\square - \square = \square$$


$$\square - \square = \square$$

Add the Dice


Directions: Count the dots on the dice and add them together to find the answer! Write the answer on the line.




+




=




+




=




+




=




+




=



+





=




Add the Dice


Directions: Count the dots on the dice and add them together to find the answer! Write the answer on the line.




+




=




+





=




+




=




+



=



+



=
